


## Number Lines Lesson 2

### Graphing Points

### Interpreting Activity Answer Key

List the numbers graphed on each number line in the "L2-NL-Interpreting-Activity.brf" file and number your answers. [There is a braille answer document "L2-NL-Interpreting-Activity-Answers.brf" that can be used to independently check answers.]

1. A braille number line is shown. The scale marks are in increments of 1 starting with 0 and ending with 8. A closed circle is placed above the scale marks at 1, 3, 5 and 7.




Answer:

1. 1, 3, 5, 7


1. 1, 3, 5, 7

2. A braille number line is shown. The scale marks are in increments of 1 starting with -2 and ending with 6. A closed circle is placed above the scale marks at -2, 0, 2, and 6.





5. A braille number line is shown. The scale marks are in increments of one-half starting with negative one-half and ending with 1. A closed circle is placed above the number line at the scale mark for negative one-half, halfway between the scale marks for 0 and one-half, and at the scale mark for 1.



Answer:


5. negative one-half, one-fourth, 1

$$-\frac{1}{2}, \frac{1}{4}, 1$$



Write the number associated with each point.

6. A braille number line is shown. The scale marks are in increments of 100 starting with -200 and ending with 400, but only every other scale mark is labeled. A closed circle is placed above the number line halfway between the scale marks for -200 and -100, halfway between the scale marks for 0 and 100, halfway between the scale marks for 100 and 200, halfway between the scale marks for 200 and 300, and at the scale mark for 400. From left to right, these closed circles are labeled A, B, C, D, and E.



Page 4 of 4